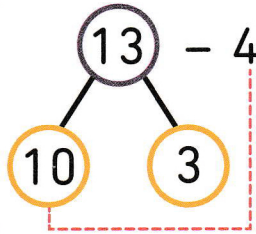
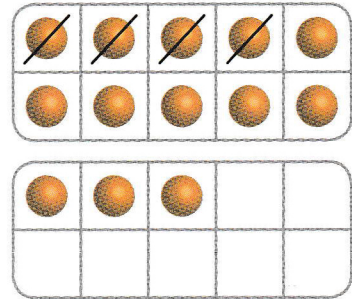


J'observe

Soustrais 4 de 13.

Décompose d'abord
13 en 10 et 3
puis soustrais 4 de 10.



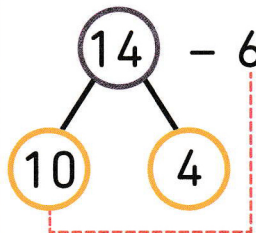
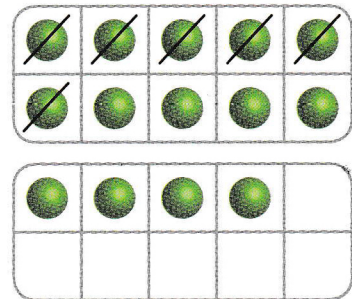

$$10 - 4 = 6$$

$$6 + 3 = 9$$

$$13 - 4 = 9$$

Soustrais 6 de 14.

Soustrais 6 de 10.



$$10 - 6 = 4$$

$$4 + 4 = 8$$

$$14 - 6 = 8$$